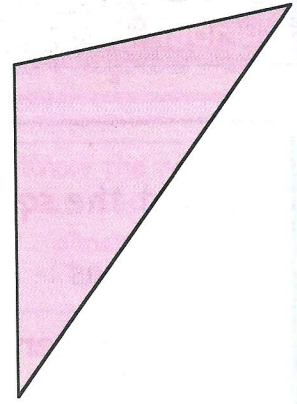


①

Draw a **triangle** like this one.

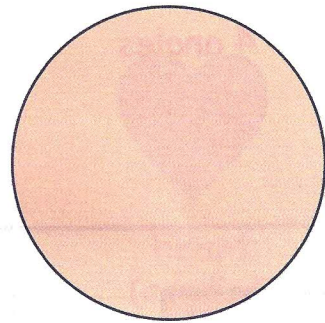
- Write the word **side** next to each side.
- Write the word **corner** next to each corner.
- Mark each **angle** with an arc.



②

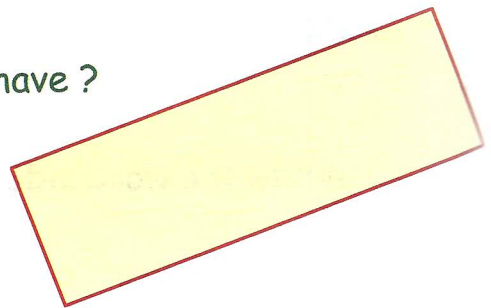
Here is a **pink circle** :-

- How many **sides** does it have ?
- How many **angles** does it have ?
- How many **corners** does it have ?




③

- How many **corners** does a **rectangle** have ?
- How many **sides** does it have ?
- How many **angles** does it have ?



④

- How many **angles** does a **square** have ?
- How many **corners** does it have ?
- How many **sides** does it have ?



⑤

- How many **sides** does a **triangle** have ?
- How many **angles** does it have ?
- How many **corners** does it have ?

