

Art attack!

• Answer the questions.

6p each 

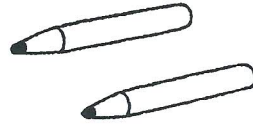
1.



How much will these cost?


12p

2.



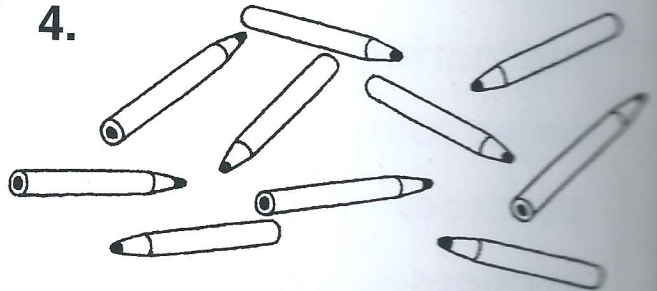
You buy these with a 20p coin. What is your change?

3.



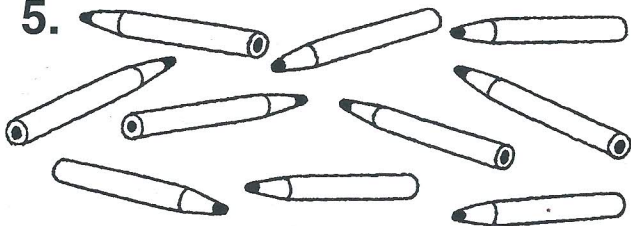
You buy these with a 50p coin. What is your change?

4.




How much will these cost?

5.



How can you pay for these exactly with three coins?

6.



You buy these with a £1 coin. What is your change?



Two pencils and a rubber cost 18p.



• How much does a rubber cost? _____

Teachers' note These questions involve a range of one-step and two-step operations. The activity could be made simpler by changing the price of a pencil, for example to 5p. This sheet can be used in conjunction with the next to provide differentiation in the main part of the lesson.

Developing Numeracy
Solving Problems Year 2
© A & C Black