



## Revision of 2-D Shapes

1. Write down the name of each shape :-




2. Look at this group of shapes.

- a How many **triangles** are there ?
- b How many **circles** ?
- c How many **squares** ?
- d How many **rectangles** ?
- e How many **brown triangles** ?
- f How many **green squares** ?



3. Look at the pictures below and write down any shapes you see in them.



4. This picture of a house and garage in the sun has many shapes. How many :-

- a squares
- b triangles
- c rectangles
- d circles
- e **red** rectangles ?

