
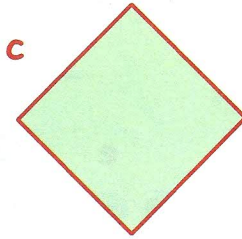

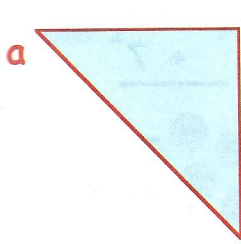



The 3
A's

Revisit - Review - Revise

1. Name these 2 dimensional shapes :-



2. Name the 2 dimensional shapes in the picture and say how many of them there are.



3. How many :-

a angles are in a triangle

b sides are in a circle

c angles are in a square

d corners are in a circle

e sides are in a triangle

f corners are in a triangle

g corners are in a square

h sides are in a rectangle ?

4. Write down one way in which :-

a a square is different from a triangle

b a circle is different from a rectangle.

5. What does the word **quadrilateral** mean ?

