



7. Alice bought some pencils costing 40p. She gave the shopkeeper a £1 coin.



- a How much change did she get ?
- b List the coins she could have been given as her change.

8. Bobby spent 68p on juice and handed over a £1 coin.



- a How much change did he get ?
- b List the coins he might have received in change.

9. Each child below gave a £1 coin to pay for their items.

Write down their change and the coins they could have received :-

a Dylan




70p

b Ellie



35p

c Max



85p

d Sal



5p

10.



This was Dee's change from a £1 coin.

How much had Dee spent ?

11. a Ari got 80p change from his £1 coin. How much had Ari spent ?

b Seth got 55p change from a £1 coin. How much had he spent ?

c May got 87p change from a £1 coin. How much had she spent ?