


Number of Sides, Corners and Angles

Know how many sides, corners and angles 2-D shapes have.




Look at the **square**.

It has :-

- 4 corners
- 4 sides
- 4 angles

This is a **side**.



This is a **corner**
(or **vertex**).

This is an **angle**.

It is a **right angle**.

Exercise 2

Ruler




and Coloured Pencils needed!

Worksheet 7.1

1. Draw a **rectangle** like this one.

- Write the word **side** next to each side.
- Write the word **corner** next to each corner.
- Mark each **right angle** like this :-

corner




side

angle

2. Draw a **square** like this one.

- Write the word **side** next to each side.
- Write the word **corner** next to each corner.
- Mark each **right angle** like this :-



3. Write down 1 thing that makes a square **different** from a rectangle.