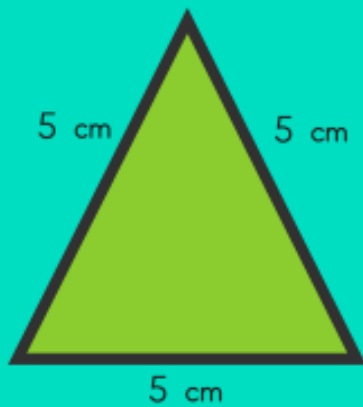
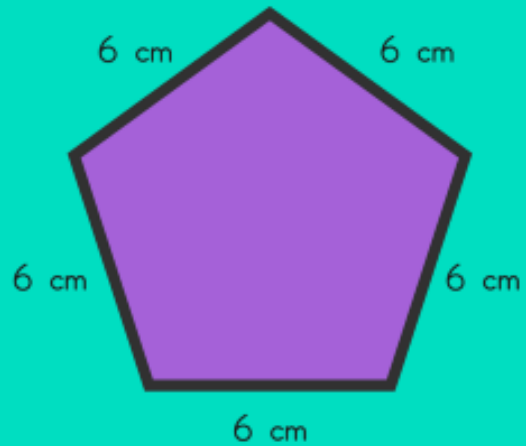


Perimeter

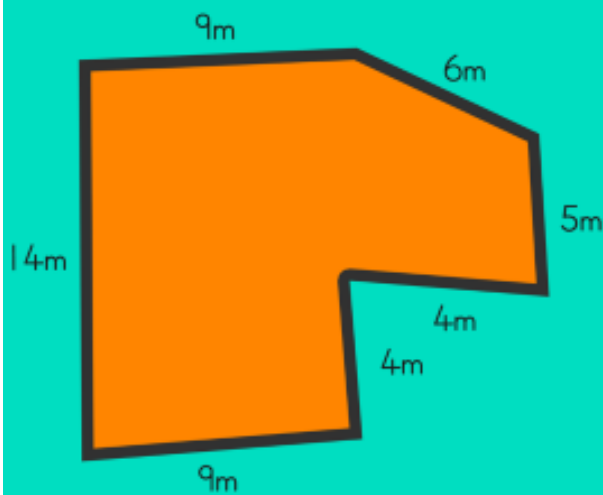
The distance around the edge of a shape
Add the lengths of all the sides for each shape



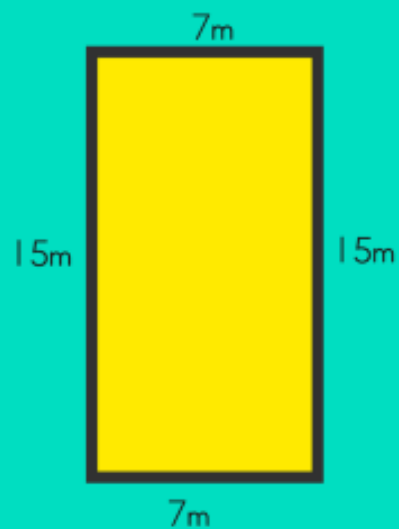
$$5 + 5 + 5 = 15 \text{ cm}$$



$$6 + 6 + 6 + 6 + 6 = 30 \text{ cm}$$



$$14 + 9 + 6 + 5 + 4 + 4 + 9 = 51 \text{ m}$$



$$15 + 7 + 15 + 7 = 44 \text{ m}$$